



SURREKEY EXAMINATIONS BOARD
PRIMARY LEAVING UNIQUE SET EXAMINATION
2022

SOCIAL STUDIES WITH RELIGIOUS EDUCATION

Time Allowed: 2 hours 15 minutes

Index No.						Personal No.		

Candidate's Name:

Candidate's Signature:

School Name:

District Name:

Read the following instructions carefully:

1. Do not forget to write your **school** or **district name** on the paper.
2. This paper has two sections: **A** and **B**.
Section **A** has **40** questions and section **B** has **15** questions. The paper has **16** printed pages.
3. Answer **all** questions. **All** working for both sections **A** and **B** must be shown in the spaces provided.
4. **All** answers **must** be written using a **blue** or **black** ball point pen or ink. Any work written in pencil will **not** be marked.
5. Unnecessary **changes** in your work and handwriting that cannot be read easily may lead to **loss of marks**.
6. Do not fill anything in the table indicated: **"For Examiners' use only"** and boxes inside the question paper.

FOR EXAMINERS' USE ONLY		
Qn. No.	MARKS	EXR'S NO.
1 – 10		
11 – 20		
21 – 30		
31 – 40		
41 – 43		
44 – 46		
47 – 49		
50 – 52		
53 – 55		
TOTAL		

SECTION A: 40 MARKS

Questions **1** to **40** carry **one mark** each

1. Name the second largest continent in the world.

.....

2. Mention any **one** month of the year when the sun over heads the Equator.

.....

3. Give any **one** important place in your community.

.....

4. State any **one** cause of road accidents on Ugandan roads.

.....

5. Give any **one** problem faced by the government of Uganda in its attempt to provide social services to the citizens.

.....

6. Give any **one** way the introduction of cowrie shells promoted trade in East Africa.

.....

7. Mention any **one** river in Africa that serves more than one purpose.

.....

8. Give any **one** cause of insecurity in our community today.

.....

9. What title is given to the political head of a Municipality?

.....

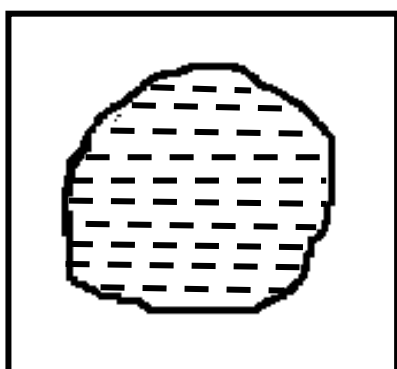
10. Mention any **one** factor that makes the Bachwezi to be economically Remembered in East Africa.

.....

11. Mention any **one** group of people who use a compass in their daily activities.

.....

12. Identify the map symbol drawn below.



.....

13. Give any **one** way peace is promoted at home.

.....

14. Why did European colonialists use physical features to form boundaries of African countries?

.....

.....

15. Give **one** factor that makes Miombo woodland of central Tanzania not suitable for cattle keeping.

.....

16. How do people of Uganda show respect to their national anthem?

.....

.....

17. Give any **one** way in which apartheid policy was fought in South Africa.
-
18. What type of climate supports the growth of citrus fruits?
-
19. Give **one** way missionaries helped in fighting slave trade.
-
20. Why did the early traders move in caravans?
-
-
21. Give any **one** problem faced by Uganda due to her geographical location.
-
22. Name the United Nations agency that teaches good farming methods.
-
23. How do primary industries benefit secondary industries?
-
-
24. Give **one** way Kabaka Yekka party helped Uganda People's Congress To lead Uganda to independence.
-
-

25. Mention **one** role played by National Forestry Authority (NFA) as the body instituted in Uganda.

.....

26. Why was salt on high demand during Trans-Saharan Trade (TST)?

.....

.....

27. How does the government of Uganda benefit from a high population?

.....

28. What is rural electrification?

.....

.....

29. Give any **one** strategy the Ugandan government emphasized to stop the spread of COVID 19 / Corona virus.

.....

30. How can farmers in semi-arid areas be able to grow crops?

.....



31. State **one** way good hotels and lodges promote the tourism sector.

.....

.....

32. Mention any one economic challenge that African Union faces as it tries to perform its duties.

.....

33. Give any **one** reason for the scramble and partition of Africa.

.....

34. Identify any **one** way the government of Uganda is trying to solve the problem of poverty among citizens.

.....

35. Why is terracing necessary in mountainous areas?

.....

For each of the questions **36** to **40**, answer **Either** the Christian **OR** Islamic questions but **not** both. No **marks** will be awarded to a candidate who attempts both alternatives in **a particular number**.

36. **EITHER:**

How important were the Ten Commandments to the Israelites?

.....

OR:

How important are pillars of Islam to Muslims?

.....

37. **EITHER:**

Give any **one** way God will reward sinners on the day of judgment.

.....

OR:

Give any **one** way Allah will reward sinners on the day of judgment.

.....

38. **EITHER:**

Mention any **one** cause of suffering among Christians.

.....

OR:

Mention any **one** cause of suffering among Muslims.

.....

39. **EITHER:**

Why do Christians pray?

.....

OR:

Why do Muslims pray?

.....

40. **EITHER:**

Which organization unites all Christians in Uganda?

.....

OR:

Which organization unites all Muslims in Uganda?

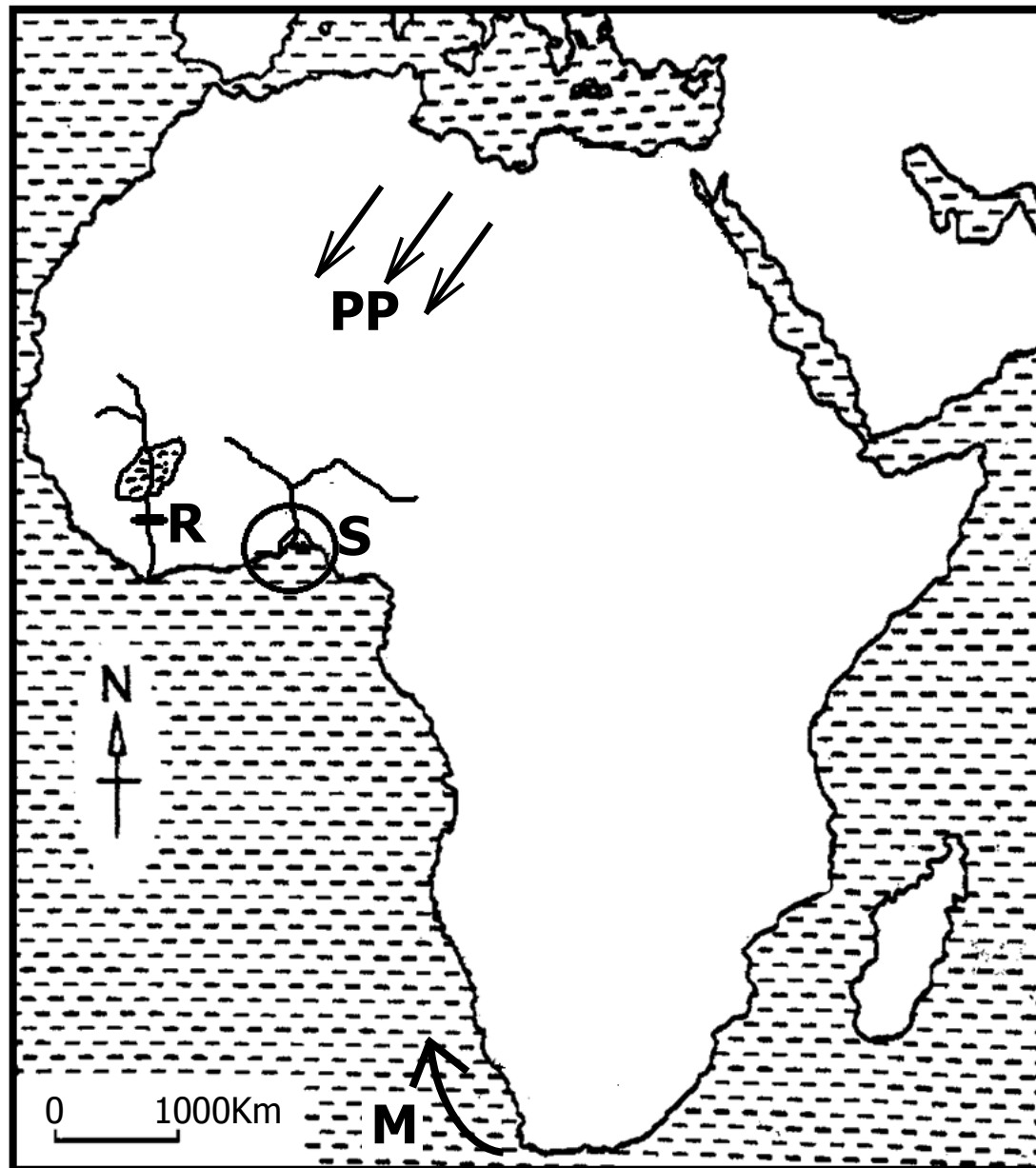
.....



SECTION B: 60 MARKS

Questions **41** to **55** carry four marks each.

41. Study the sketch map of Africa below and use it to answer the questions that follow.



- a) Name the ocean current marked **M**.
-
- b) Mention any **one** reason why region marked **S** is densely populated
-
- c) Why does prevailing winds labeled **PP** cause Sahara desert?
-
- d) Mention **one** way the government of Ghana has benefited from the feature marked **R**.
-

42. a) What is decentralization?
-
-
- b) Give any **two** ways people benefit from the policy of decentralization.
- i)
- ii)
- c) State any **one** role played by the Resident District Commissioner
-
43. a) What is global warming?
-
-
- b) State any **two** causes of global warming.
- i)
- ii)
- c) Mention any **one** method of reducing global warming.
-



44. a) Give any **two** reasons for the formation of LEGCO in 1921 in Uganda.
- i)
- ii)
- b) Mention any **two** reasons why Ugandans were not happy with the LEGCO that was formed in 1921 during colonial times.
- i)
- ii)

45. **List A** below has some important people in our community with their places of work in **List B**. Match them correctly.

LIST A	LIST B
i) Teacher	police station
ii) Doctor	school
iii) Carpenter	workshop
iv) Police	hospital

- i) Teacher
- ii) Doctor
- iii) Carpenter
- iv) Police

46. a) What term is given to events that bring people together?
-
- b) Give any **two** examples of such events that bring people together.
- i)
- ii)

- c) Mention any **one** activity that is performed to promote culture in our societies today.

.....



47. a) In which country did the Mau-Mau rebellion take place?

.....

- b) State any **one** cause of the Mau-Mau rebellion.

.....

- c) Give **one** reason why the Mau-Mau rebellion took long to end.

.....

- d) Why did the French use assimilation policy in their countries?

.....

48. a) What was Great Trek?

.....

.....

- b) Mention any **two** causes of Great Trek.

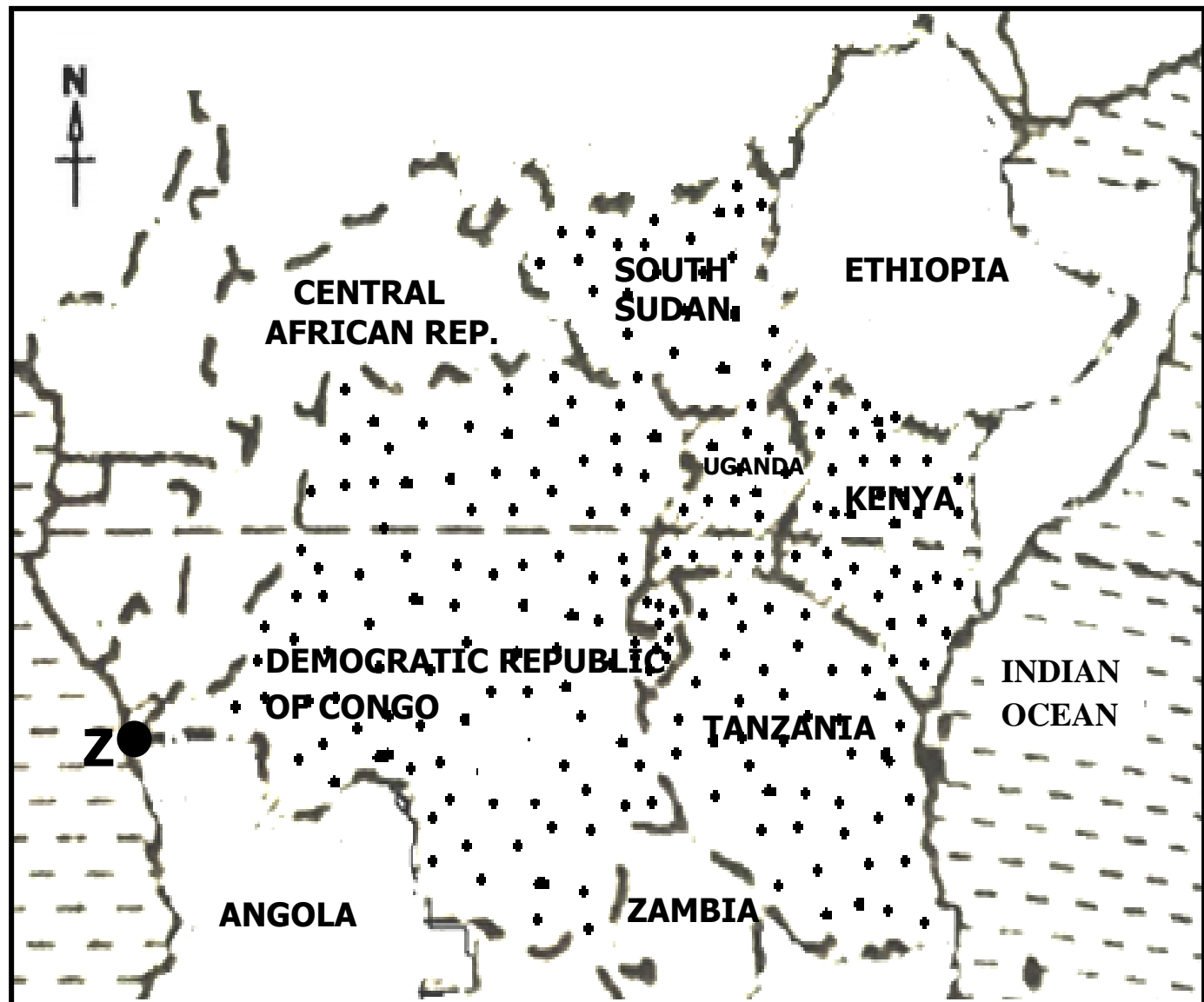
i)

ii)

- c) How did the Great Trek benefit South Africa economically?

.....

49. Study the map extract below and answer the questions that follow.



a) Name the regional economic bloc that promotes trade among the countries dotted above.

.....

b) Name the sea port marked **Z** on the map above.


.....

c) Mention any **one** problem faced by the regional economic bloc Named in (a) above.

.....

d) Apart from the regional economic bloc named above, give any other **one** regional economic bloc in Africa.

.....



50. a) Give any **two** reasons why the Bantu left their homeland.
- i)
- ii)
- b) Mention any **one** negative effect of Bantu migration and settlement into East Africa.
-
- c) How did Mirambo benefit from the coming of the Ngoni who left South Africa due to Shaka Zulu wars?
-
-

For each of the questions **51** to **55**, answer **EITHER** the Christian **OR** Islamic questions but **not** both. **No mark** will be awarded to a candidate who attempts both alternatives in **a particular number**.

51. **EITHER:**
- a) What special way of communicating to God did Jesus Christ teach to His disciples?
-
- b) Give any **three** reasons why Jesus Christ emphasized Christians to be prayerful to God.
- i)
- ii)
- iii)

OR:

a) What special way of communicating to Allah did Prophet Muhammad (P.B.U.H) teach Muslims to use five time in a day?

.....

b) Give any **three** reasons why Prophet Muhammad (P.BBUBH) emphasized Muslims to be prayerful to Allah.

i)

ii)

iii)

52. **EITHER:**

a) Mention any **two** services you as a child can offer to the Church.

i)

ii)

b) Give any **two** ways Christians prepare for church service.

i)

ii)

OR:

a) Mention any **two** services you as a child can offer to your Mosque.


i)

ii)

b) Give any **two** ways Muslims prepare for Jumah service.

i)

ii)



53. **EITHER:**

- a) Why do Christians need to forgive one another?
.....
- b) State any **one** situation in the Bible that shows forgiveness.
.....
- c) Mention any **two** ways of reconciliation.
 - i)
 - ii)

OR:

- a) Why do Muslims need to forgive one another?
.....
- b) State any **one** situation in the Quran that shows forgiveness.
.....
- c) Mention any **two** values of reconciliation.
 - i)
 - ii)

54. **EITHER:**

- a) Mention any **one** talent God gives to His people.
.....
- b) State any **two** ways talents can be discovered.
 - i)
 - ii)
- c) How do Christians benefit from their talents?
.....

OR:

a) Mention any **one** talent Allah gives to His people.

.....

b) State any **two** ways talents can be discovered.

i)

ii)

c) How do Christians benefit from their talents?

.....

55. **FOR BOTH CANDIDATES TO ATTEMPT:**

a) Give any **two** similarities in belief between Christians and Moslems.

i)

ii)

b) Name the Holy Book used in Christianity / Islam.

.....

c) Give **one** reason why the book named in (b) is called a Holy Book in Christianity / Islam.

.....

